

1. true

2. False; it is written as \overrightarrow{QP}

3. true

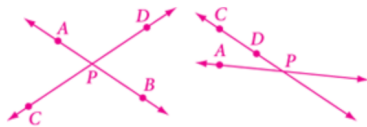
4. False; the vertex is point D.

5. true

6. true

7. False; its measure is less than 90° .

8. false



$\angle APD$ and $\angle APC$
are a linear pair.

$\angle APD$ and $\angle APC$
are the same angle.

9. true

10. true

11. False; they are supplementary.

12. true

13. true

14. true

15. False; it has five diagonals.

16. true

17. F

18. G

19. L

20. J

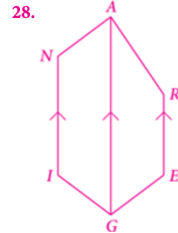
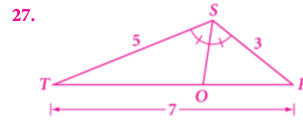
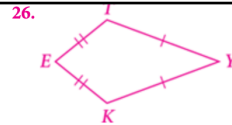
21. C

22. I

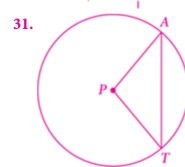
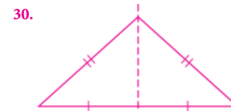
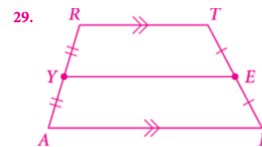
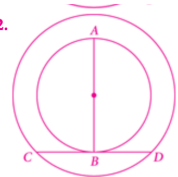
23. no match

24. A

25. no match



32.



39. $AB = 16$ cm

40. 96°

41. 30°